




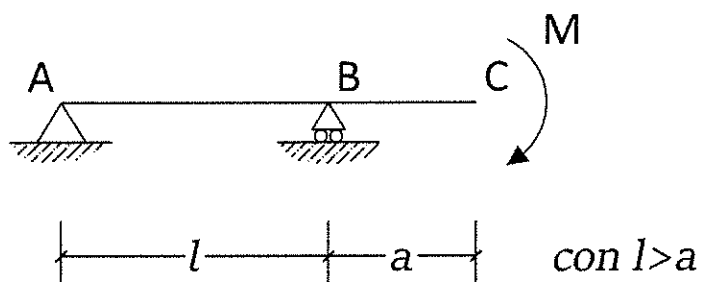


3) Illustrare ai sensi del LR 19/2008 (art. 11, 22 ) e s.m.i. e DPR 380/2001 (art. 96, TUE) la procedura e le condizioni ineludibili atte al rilascio del cosiddetto '*titolo abilitativo sismico in sanatoria*'. Procedimento e documenti essenziali.



B - Risolvere la seguente trave indicando reazioni vincolari, diagrammi e deformata.



Reazioni Vincolari:

$V_A =$

$H_A =$

$V_B =$

Diagramma di Taglio




$T_A =$

$T_B =$

$T_C =$

Diagramma Momento



$M_A =$

$M_B =$

$M_C =$

Deformata (solo qualitativa)

