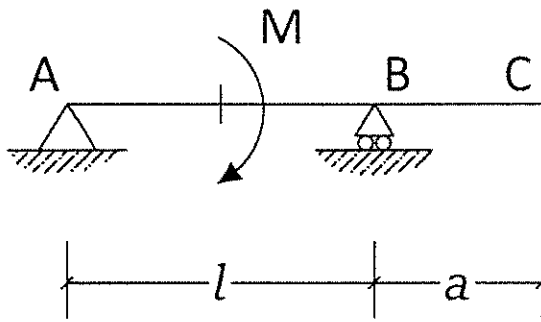
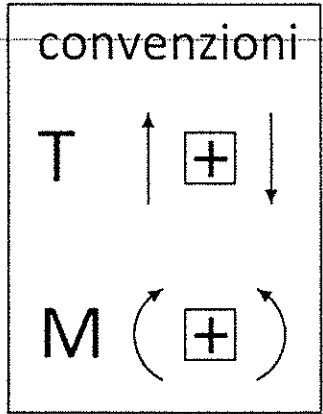


C - Risolvere la seguente trave indicando reazioni vincolari, diagrammi



con $l > a$




Reazioni Vincolari:

$V_a =$

$H_a =$

$V_b =$

Diagramma di Taglio




$T_a =$

$T_b =$

$T_c =$

Diagramma Momento



$M_a =$

$M_b =$

$M_c =$

Stu. 2.1