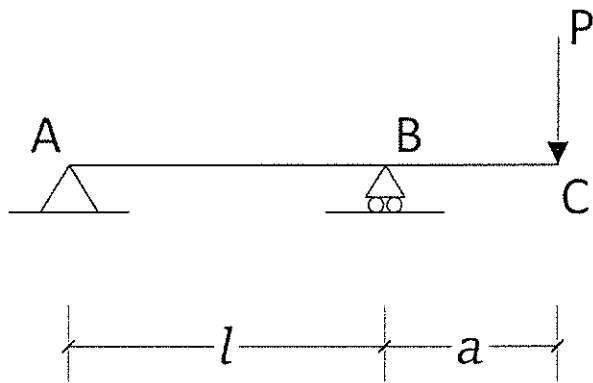


B-Risolvere la seguente trave indicando reazioni vincolari, diagrammi e deformata.



convenzioni

T ↑ ⊕ ↓

M (⊕)


Reazioni Vincolari:

$V_a =$

$H_a =$

$V_b =$

Diagramma di Taglio




$T_a =$

$T_b =$

$T_c =$

Diagramma Momento



$M_a =$

$M_b =$

$M_c =$

Deformata (solo qualitativa)

